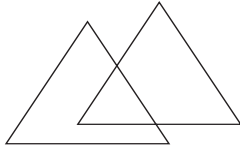


Worksheet 1

1. Count the number of triangles.

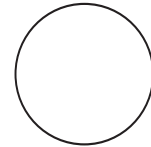


_____ triangles

2. Name the following shapes.







3. Match the shape with its name and colour it.

(i)




a.



(ii)



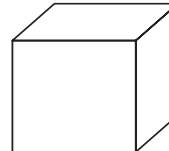
b.



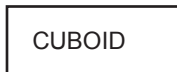
(iii)



c.



(iv)

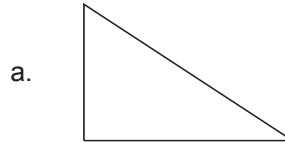


d.



4. Match the shape with the number of sides and colour them.


(i) 4 equal sides




(ii) 10 sides



(iii) 2 opposite sides equal



(iv) 3 sides



5. Fill in the blanks.

a. A square has _____ corners.

b. A cuboid has _____ faces.

c. A cylinder has _____ curved surface.

d. A cone has _____ flat surface.

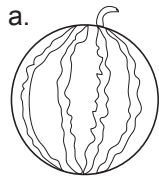
e. A sphere has _____ vertices.

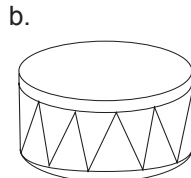
f. A cube has _____ corners.

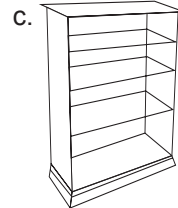
g. A cone has _____ vertex.

h. A cube has _____ edges.

6. Write the shape of the following objects.








Worksheet 2

1. Match the objects with their shapes.


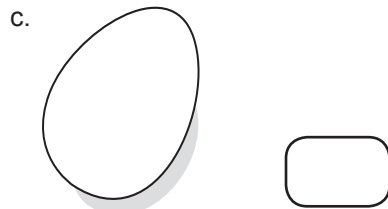

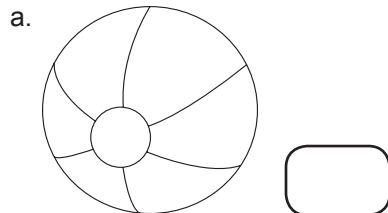


2. Write 2 examples in each case.

- a. cone-shaped vegetables
- b. spherical-shaped fruits
- c. cylindrical-shaped objects
- d. cuboidal-shaped objects

i. _____	ii. _____
i. _____	ii. _____
i. _____	ii. _____
i. _____	ii. _____

3. Write 'S' for slide or 'R' for roll in the boxes given below.



4. Write 'S' for straight line and 'C' for curved line in the boxes given below.

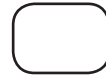
a. _____




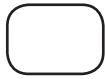
b. 

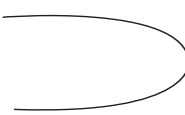


c. 




d. 




e. 



5. Colour the shape castle and count the number of rectangles and triangles.



 = _____

 = _____

Answers to Worksheet 1

1. 3
2. Square; Rectangle; Circle
3. (i) → c (ii) → a (iii) → d (iv) → b
4. (i) → c (ii) → d (iii) → b (iv) → a
5. a. 4 b. 6 c. 1 d. 1 e. 0 f. 8 g. 1 h. 12
6. a. Sphere b. Cylinder c. Cuboid

Answers to Worksheet 2

2. a. Radish, Carrot b. Orange, Guava c. Drum, Coke can d. Shoe box, Book
3. a. R b. R c. R d. S
4. a. S b. C c. S d. S e. C
5. 4, 19